

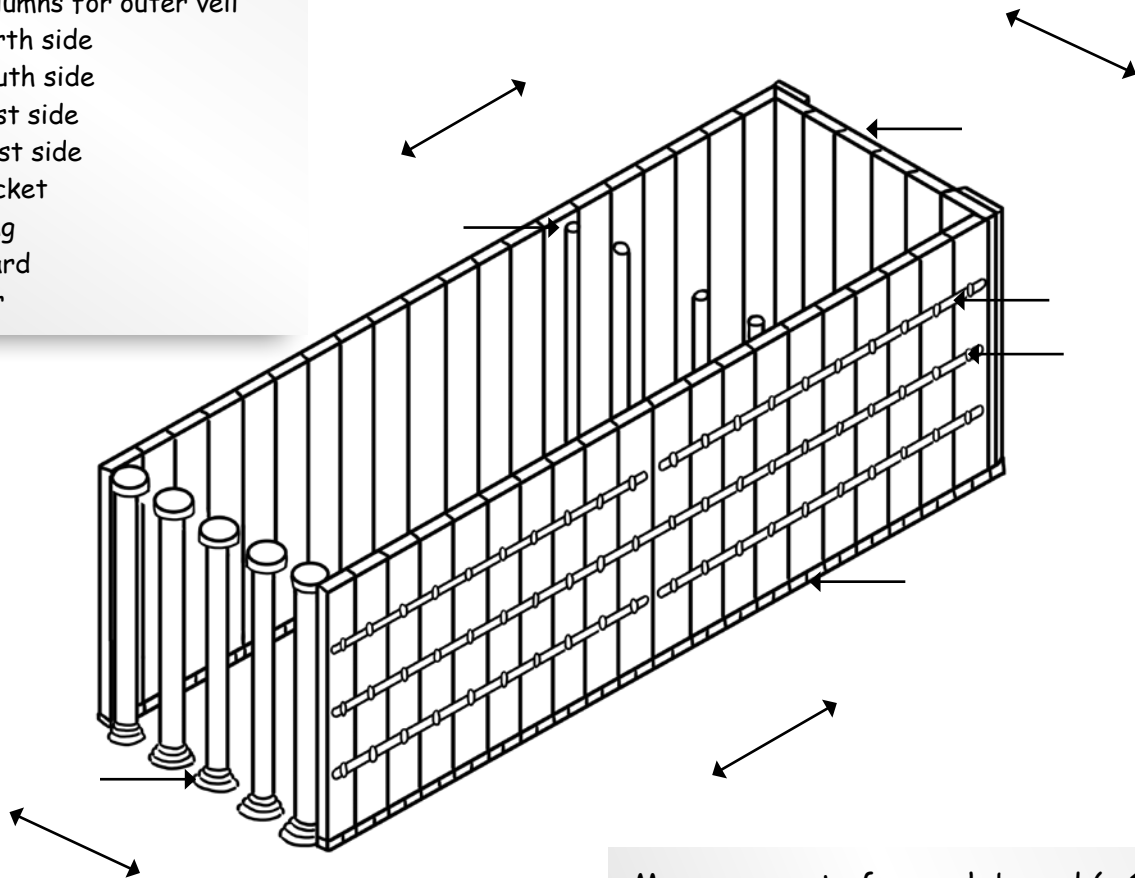
WORKSHEETS

Exodus 26:15-37 describes the structure of the Dwelling Place

Label the following:

- (a) columns for inner veil
- (b) columns for outer veil
- (c) north side
- (d) south side
- (e) east side
- (f) west side
- (g) socket
- (h) ring
- (i) board
- (j) bar

Color the Dwelling Place below with the correct metal colors.



Measurements for each board (v 16):

_____ long

_____ wide

Which part of the Dwelling Place used acacia wood?

1) _____ 2) _____ (v 15, 26)

Which part of the Dwelling Place used gold?

1) _____ 2) _____ 3) _____ 4) _____ (v 29, 32, 37)

Which part of the Dwelling Place used silver?

1) _____ 2) _____ (v 19, 32)

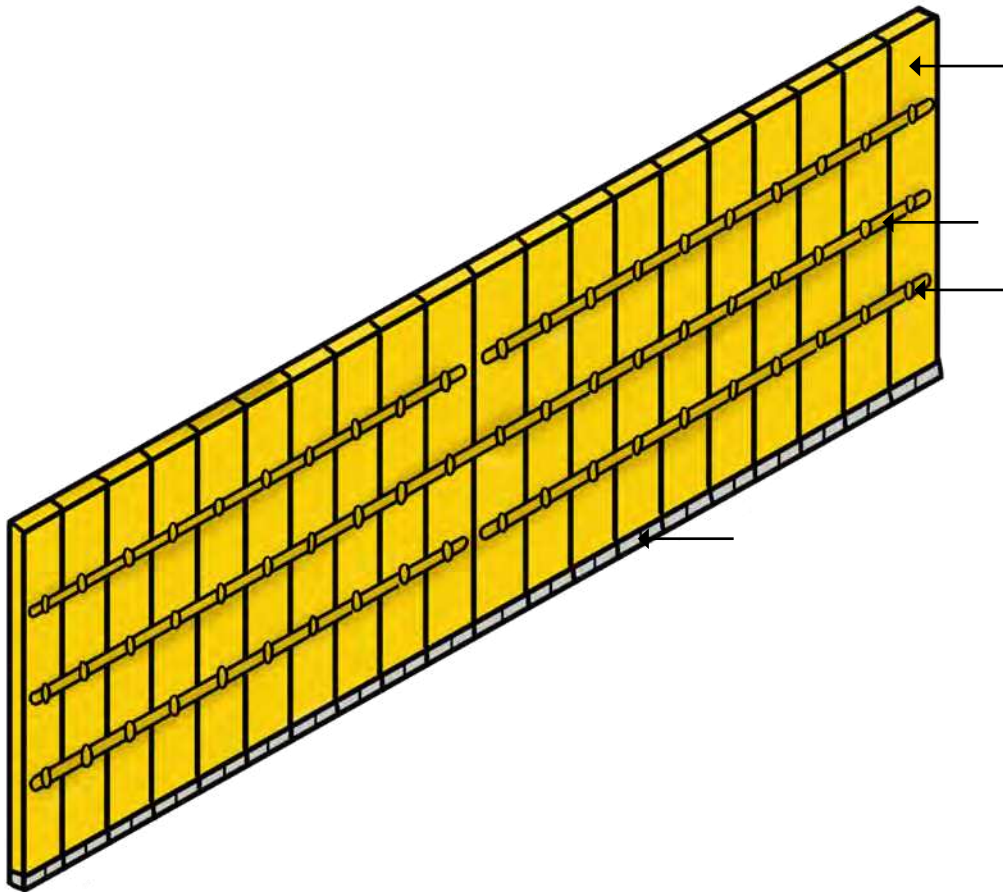
Which part of the Dwelling Place used bronze? _____ (v 37)

How many sockets were under each board? _____ (v 19)

Exodus 26:18-29 describes the north and south sides

Label the following:

- (a) socket
- (b) ring
- (c) board
- (d) bar



How many boards were on the north side? _____ south side? _____ (v 18, 20)

How many bars were on the north side? _____ south side? _____ (v 26-27)

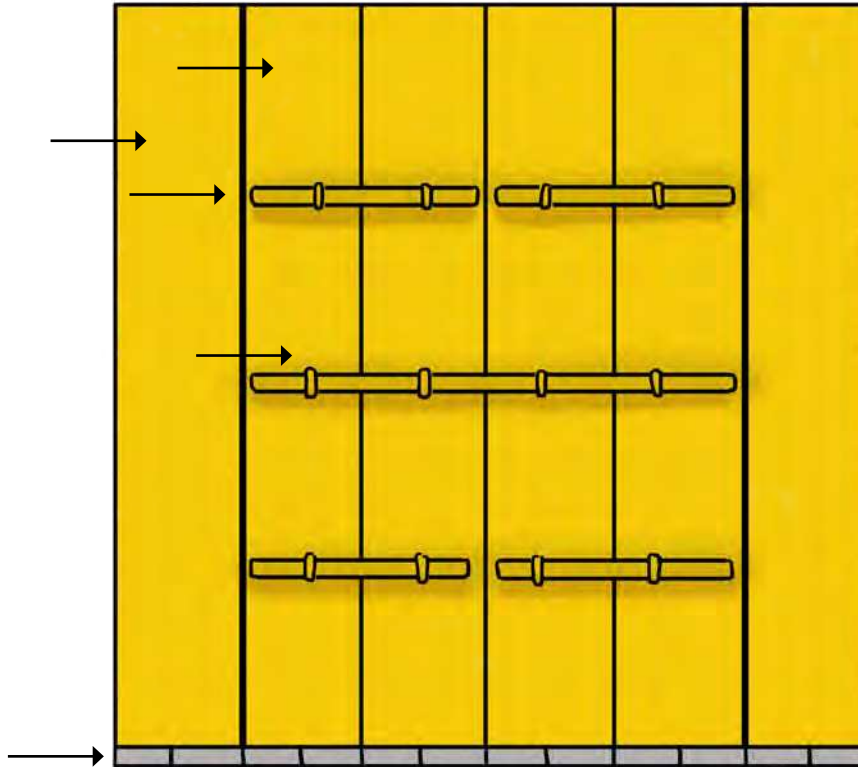
How many sockets were on the north side? _____ south side? _____ (v 19, 21)

Which bar went from end to end? _____ (v 28)

Exodus 26:15, 22-29 describes the west side

Label the following:

- (a) single board
- (b) double boards
- (c) bar
- (d) ring
- (e) socket



Which part of the west side had double boards? _____ (v 23-24)

How many boards were on the west side? _____ (v 25)

How many total sockets were on the west side? _____ (v 25)

How many bars were on the west side? _____ (v 27)

Which bar went from end to end? _____ (v28)